



Duration : 60 Min.
Total Ques. : 40
Paper Type : I 1

An ISO 9001:2015 Certified Organization
GLOBAL COMPETITION SOCIETY

2
CLASS

SAMPLE Q.P : GLOBAL INFORMATICS OLYMPIAD (GIO)

Student's Name.....

Enrollment Number :

-----Signature of Exam Incharge-----

-----Signature of Student's-----

1. The Actual Question Paper Contains 40 Questions.
2. Each question carry an equal marks of 2.5 against 40 question
3. The Duration of the Test Paper is 60 Minutes

1. Which of the following statements is/are CORRECT regarding the given device?



- (A) It is a smart machine.
- (B) It can store many things like words, numbers and pictures.
- (C) It works when it gets order from you.
- (D) All of these
- (E) None of these

2. Which of the following statements is INCORRECT in the context of a computer?

- (A) It can work at a very high speed.
- (B) It has very good memory. It cannot forget the information stored in it.
- (C) It cannot do the same work again and again. It gets bored.
- (D) It cannot make any mistake on its own.
- (E) None of these

3. The first calculating device used by man was

-
- (A) Computer
 - (B) Calculator
 - (C) Abacus
 - (D) All of these
 - (E) None of these

4. With the help of a calculator, you can do large calculations in less time. Which of the following operations are performed by a calculator ?

- (A) Addition and subtraction operations
- (B) Multiplication and division operations
- (C) Scientific and financial calculations
- (D) All of these
- (E) None of these

5. Which of the following is a basic feature of a computer?

- (A) It can think.
- (B) It can work without electricity.
- (C) It can store information.
- (D) It can make its own decisions.
- (E) None of these

6. When you start the computer, the first screen that you see is -----.

- (A) Wallpaper (B) Monitor
 (C) Icons (D) Desktop
 (E) None of these

7. How can you take proper care of your computer ?

- (A) By keeping it in a hot room.
 (B) By keeping it in a cool and dust free room.
 (C) By allowing dust and moisture around the computer.
 (D) All of these
 (E) None of these

8. Computer is an advanced machine when compared to a calculator, because the computer

- (A) Can perform more complex mathematical calculations
 (B) Can perform logical operations
 (C) Has memory and can store large amount of data
 (D) All of these
 (E) None of these

9. Which of the following tasks cannot be done with the help of device shown here ?

- (A) To point icons on screen
 (B) To draw pictures on screen
 (C) To type letters on screen
 (D) All of these
 (E) None of these



10. Which of the following statements is NOT true in context of a CPU ?

- (A) You can watch movies on it.
 (B) It stands for Central Processing Unit.
 (C) It is the brain of the computer.
 (D) It makes all the parts of a computer work.
 (E) None of these

11. In hospitals, computers are mainly used for -----

- (A) Maintaining patients records
 (B) Preparing discharge slips
 (C) Maintaining case histories of patients
 (D) All of these
 (E) None of these

12. Computers in banks can be used to maintain-----.

- (A) Records of customers
 (B) Processing transactions
 (C) Cash records
 (D) All of these
 (E) None of these

13. What is the use of the  key on the keyboard ?

- (A) It opens a new window.
 (B) It opens the Start menu.
 (C) It closes the current application.
 (D) It is used to delete the current program.
 (E) None of these





14. When we click the left mouse button and drag the mouse without releasing the button, it is known as

- (A) De selecting (B) Click and Drag
 (C) Drop and Release (D) All of these
 (E) None of these

15. The tool used to draw with different kinds of brushes is -----.

- (A)  (B) 
 (C)  (D) 
 (E) None of these

16. The tool used to select portions of the image we are working with, is -----.

- (A)  (B) 
 (C)  (D) 
 (E) None of these

17. Identify the function of the given tool.



- (A) It is used to pick a color from picture to use it in another drawing .
 (B) It is used to delete picture.
 (C) It is used to erase drawing.
 (D) It is used to fill the picture with color.
 (E) None of these